



# AnandNiketan

## Maninagar Campus

<b>Grade: II</b>	<b>Subject : Math</b>	<b>Date :</b>
<b>Name :</b>	<b>Practice Worksheet-V</b>	<b>(Term -III)</b> <b>Chapter No. : 2,3,4</b>
Syllabus for PT-5 (Term -3) Ch-2 Measurement Ch -3 Geometry Ch -4 Time	Written Test - 20 marks  Date : 24-02-20	Assessment activity Dictation-1 (Ch-3 (Term-3))- 30-01-20 First in Math – 10 Marks Math lab - 5 marks Mental math - 5 marks(24-02-20)

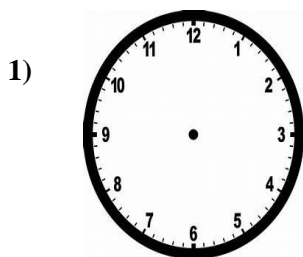
### Q1. Fill in the blanks:

- 1) There are \_\_\_\_\_ days in a Week.
- 2) Half an hour is \_\_\_\_\_ minutes.
- 3) 1 leap year = \_\_\_\_\_ days
- 4) A \_\_\_\_\_ has no end points.
- 5) Quarter past 6 is written as = \_\_\_\_\_
- 6) The long hand of the clock is called the \_\_\_\_\_.
- 7) A \_\_\_\_\_ has two end points and definite length.

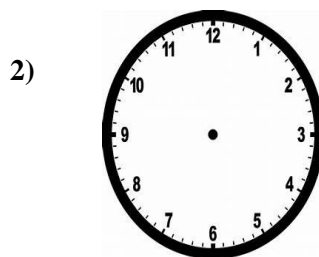
### Q2. Convert the following:

- 1) 5m 20 cm = \_\_\_\_\_ cm
- 2) 8 l = \_\_\_\_\_ ml
- 3) 1 kg = 500g + \_\_\_\_\_ g
- 4) 22 m = \_\_\_\_\_ cm
- 5) 23 kg = \_\_\_\_\_ g
- 6) 4.3 m = \_\_\_\_\_ cm

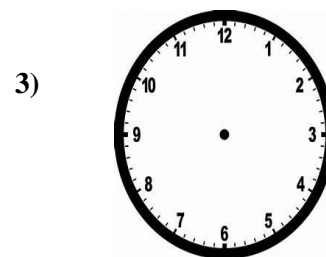
### Q3. Draw the hands and show the time:



7:15



11:45



9:30

**Q4. Story sum:**

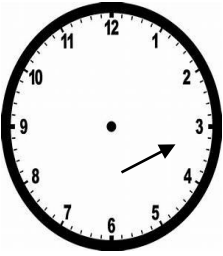
1) Sima drinks 525 ml of juice in the morning and 326 ml in the evening how much juice does she drink in a day?


<p><b>Step 1:</b> _____</p> <p><b>Step 2:</b> _____</p> <p><b>Step 3:</b> _____</p> <p><b>Ans:</b> _____</p>	
--	--


**Q.5 Answer the following :**

- (1) Which month comes after two months of April? \_\_\_\_\_
- (2) Sixth day of the week is \_\_\_\_\_
- (3) Priya plays for 1 hour. She comes back home at 5:30. So at what time did she starts playing? \_\_\_\_\_
- (4) How many days are there altogether in the months of May and June? \_\_\_\_\_
- (5) The quantity of water in a bucket measures in \_\_\_\_\_ (ml / l)
- (6) If now it is 4:30, then what will be time after 30 minutes?

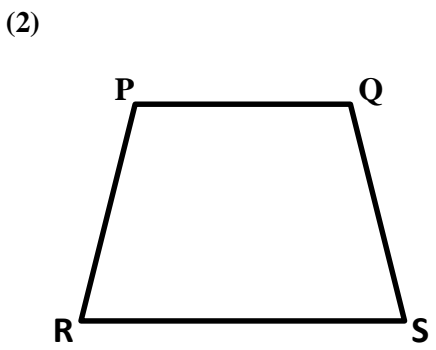
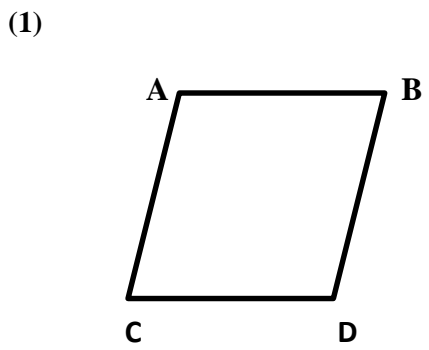
**Q 6. Write the time:**

1)  \_\_\_\_\_

2)  \_\_\_\_\_

3)  \_\_\_\_\_

**Q7. Name the points and line segments in each of the following figures:**



Points : \_\_\_\_\_

Points : \_\_\_\_\_

Line segments : \_\_\_\_\_

Line segments : \_\_\_\_\_

**Q8. HOTS:**

1) Mishti shares her birthday with Chacha Nehru 10 days after her birthday is Manya's birthday. When will be Manya's birthday celebrated on?

Ans. \_\_\_\_\_.